

Name: _____

Date: _____

POST-ASSESSMENT

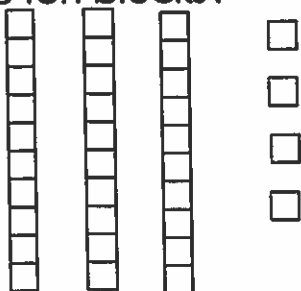
UNIT 4: PLACE VALUE

CCSS: 1.NBT.A.1, 1.NBT.B.2

TEKS: 1.2 B,C,D,E,F,G 1.5 B,C

Circle the correct answer.

Which number matches the base ten blocks?




A 35

B 43

C 34

Which number matches the base ten blocks?

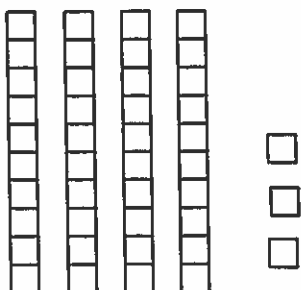


A 61

B 16

C 15

Which is true?

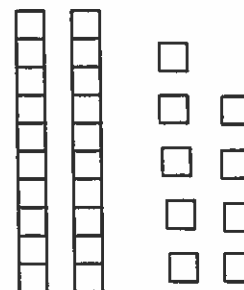


A 3 tens 4 ones

B 4 tens 4 ones

C 4 tens 3 ones

Which is true?



A 2 tens 9 ones

B 3 tens 8 ones

C 9 tens 2 ones


POST-ASSESSMENT

UNIT 4: PLACE VALUE

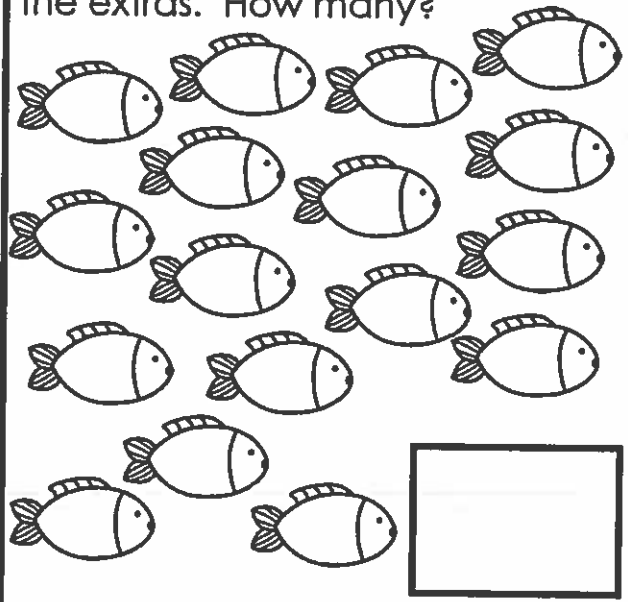
Draw 45 in tens and ones.

Draw 28 in tens and ones.

Circle groups of tens and find the extras. How many?



Circle groups of tens and find the extras. How many?



POST-ASSESSMENT

UNIT 4: PLACE VALUE

Solve.

$$10 + 5 =$$

$$10 + 2 =$$

$$10 + 3 =$$

Solve.

$$20 + 4 =$$

$$50 + 6 =$$

$$30 + 7 =$$

Draw, write a number sentence, and solve. (Optional)

Lily has 16 socks. How many tens and ones can Lily make with her socks?

Draw, write a number sentence, and solve. (Optional)

Luke has 23 marbles. How many tens and ones can he make?

POST-ASSESSMENT

UNIT 4: PLACE VALUE

1	2	3	4	5	6	7	8	9	10
11	12	13	14	15	16	17	18	19	20
21	22	23	24	25	26	27	28	29	30
31	32	33	34	35	36	37	38	39	40
41	42	43	44	45	46	47	48	49	50
51	52	53	54	55	56	57	58	59	60
61	62	63	64	65	66	67	68	69	70
71	72	73	74	75	76	77	78	79	80
81	82	83	84	85	86	87	88	89	90
91	92	93	94	95	96	97	98	99	100
101	102	103	104	105	106	107	108	109	110
111	112	113	114	115	116	117	118	119	120

Find 64.

Ten less than 64 _____

Ten more than 64 _____

Find 37.

Ten less than 37 _____

Ten more than 37 _____

Find 82.

Ten less than 82 _____

Ten more than 82 _____

Order the numbers from least to greatest.

78, 23, 45, 92

Order the numbers from least to greatest.

67, 36, 81, 50

POST-ASSESSMENT

UNIT 4: PLACE VALUE

Write $<$ $>$ or $=$ in the box. (Optional)

$83 \square 57$

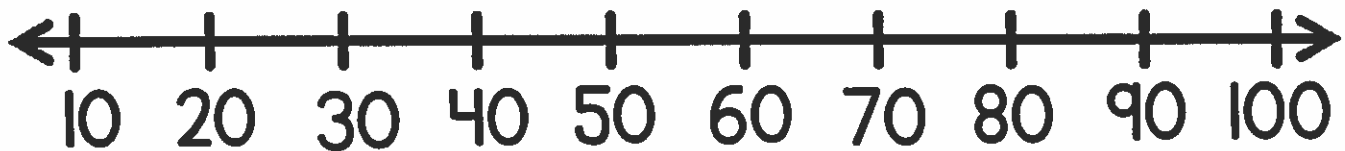
$61 \square 45$

$54 \square 54$

$25 \square 90$

$32 \square 19$

$35 \square 72$



$20 + 20 =$

$30 + 10 =$

$50 + 30 =$

